

Name: _____ ID: _____ Lab (day/time) _____

Physics 201

Midterm Exam 1

10/18/2017

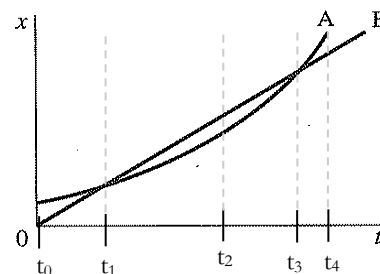
Collaboration is not allowed. Allowed on your desk are: up to ten 8.5 x 11 inch doubled sided sheets of notes that are bound together, non-communicating/graphing scientific calculator, 1 page of scratch paper, writing utensils, and the exam. You will have 80 minutes to complete this exam.

1. (8 points) A car travels for 10 mins at a rate of 25 m/s, along a trajectory north of east by 30° . Afterward, it travels due south at a rate of 30 m/s for another 12 mins. If it then travels at a rate of 15 m/s along the same initial 30° north of east trajectory, how long will it take to be due east of the initial location?

For questions 2 through 6 circle all correct answers, a given problem may have more than one correct answer. Each correctly circled answer will receive two points. There are **8** correct answers in this section and only the first **8** circled answers will be graded. There is no partial credit.

2. A certain physical quantity, **Q**, is calculated using the formula $Q = 4\pi a^2(b - c)$. Here **a** is a distance per time, while **b** and **c** are both distances. Which of the following statements are true?
- (a) **Q** must be an acceleration.
 - (b) **Q** must be an area per time squared.
 - (c) **Q** must be a volume per time squared.
 - (d) **Q** must be a speed.
 - (e) **Q** must be a distance.

3. The figure to the right shows the position vs. time graph for two bicycles, **A** and **B**, which are traveling along a straight line. Which of the following statements are true regarding the bicycles.
- (a) The velocity of A is less than B at t_2 .
 - (b) The velocity of A is equal to B at t_3 .
 - (c) The average velocity of A is equal to B between the t_1 and t_3 .
 - (d) The acceleration of A is greater than B at t_1 .
 - (e) The acceleration of A is equal to that of B at t_3 .



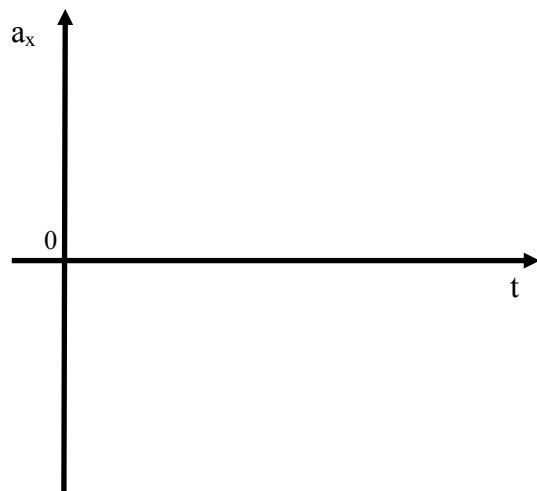
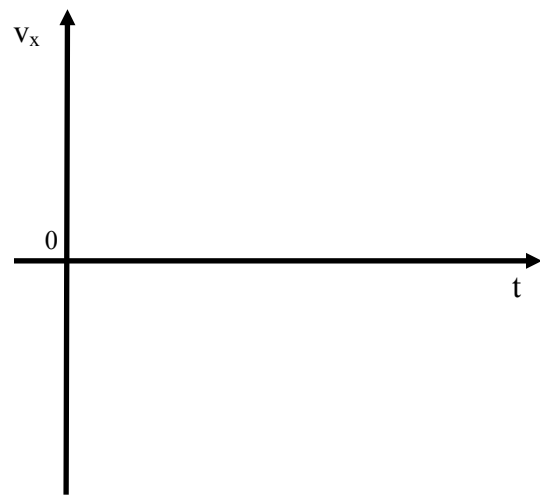
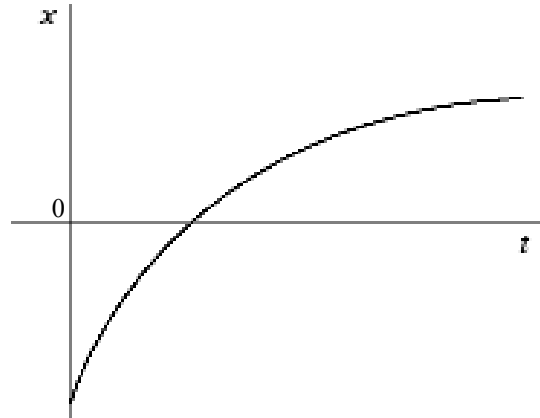
4. Ball **A** is launched from a table at an angle 30° up from the horizontal and the initial vertical component of its velocity is equal to 4 m/s. At the same time, ball **B** is fired from the same height, straight upward with an initial speed of 4 m/s. Which of the following statements about ball A and B during the time they are undergoing free-fall are true?
- (a) Both balls will take the same amount of time to hit the floor.
 - (b) Ball A will hit the floor before ball B
 - (c) Both balls will travel the same distance.
 - (d) Both balls will undergo the same acceleration.
 - (e) Both balls will have the same speed at some time during their motion.
 - (f) Ball A will always be traveling faster than ball B.

5. The speed of a wave pulse on a string depends on the tension, F , in the string and the mass per unit length, μ , of the string. Tension has SI units of $\text{kg} \cdot \text{m} \cdot \text{s}^{-2}$ and the mass per unit length has SI units of $\text{kg} \cdot \text{m}^{-1}$. What combination of F and μ must the speed of the wave be proportional to?

- (a) $\frac{\mu}{F}$ (b) $\frac{F}{\mu}$ (c) $\sqrt{\frac{F}{\mu}}$ (d) $\sqrt{\mu F}$ (e) $\sqrt{\frac{\mu}{F}}$

6. Two balls are dropped from the roof of a tall building and undergo free-fall. They are not dropped at the same time, one is dropped a short moment after the first. As time progresses, the *difference* in their speeds
- (a) decreases.
 - (b) increases.
 - (c) remains constant.
 - (d) decreases initially, but then remains constant.
 - (e) increases initially, but then remains constant.


7. (6 points) The position as a function of time is plotted for an object traveling along a straight line. (a) Sketch the corresponding velocity and acceleration as a function of time on the provided plots. (b) Write a description of this motion using a real-world example of something that travels in this manner.



8. (10 points) A dragster racing car accelerates uniformly from rest on a straight 400-m-long track. When it crosses the finish line it is traveling at a speed of 500 kph. (a) Where along the track is the car traveling at half its final speed? (b) Where along the track is the car after half the time it takes to finish?



9. (12 points) While exploring a distant asteroid, you drive your rover off a 20-m-high cliff, moving at a speed of 6 m/s. Due to irregularities in the shape of the asteroid the acceleration of gravity does not point straight down but rather a bit towards you at a 30° angle from the vertical. The asteroid is also not very big so the magnitude of the acceleration of gravity is equal to 1.5 m/s^2 . (a) What is the distance you travel before hitting the ground below? (b) With what initial speed should you have been traveling if you wanted your final velocity vector to point straight downward?



extra space if needed

Scores:

Problems

1	2-6	7	8	9
<input type="text"/>	<input type="text"/>	<input type="text"/>	<input type="text"/>	<input type="text"/>

Exam Total